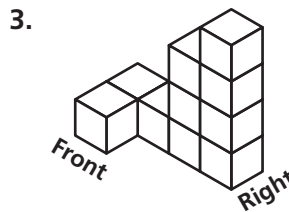
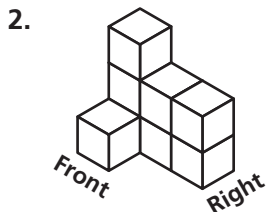



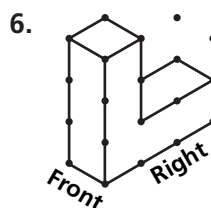
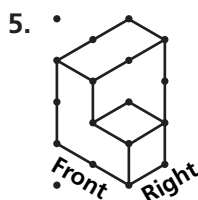
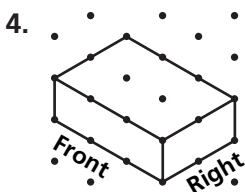
Practice 1-2

Drawings, Nets, and Other Models

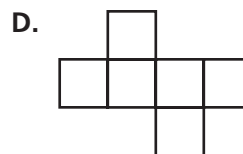
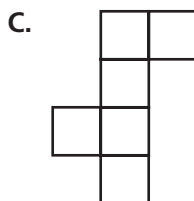
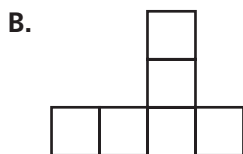
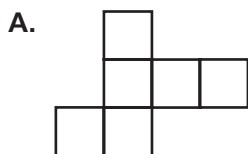
Make an isometric drawing of each cube structure.



For each figure, (a) make a foundation drawing, and (b) make an orthographic drawing.



7. Choose the nets that will fold to make a cube.



Match each three-dimensional figure with its net.

